



Critical Thinking Worksheet 3- English

Class VI

I. Some questions have only one answer. Other questions, however, have more than one answer. See how many answers you can come up with for these questions.

1. "Be sure not to lose these," Sammi said as she and her friends left on a week's camping trip. What did Sammi hand her friends?

2. How would you know whether someone had lit a fire in the grill if you hadn't been there at the time?

3. Dad looked out the car window and said, "This would not be a good place to grow crops." How did he reach this conclusion?

4. How can you tell if a person is very strong?

5. "There must have been a wedding here," Frank said. How did he come to this conclusion?

6. How are a cow and a chicken the same?

7. If you saw a hole in the ground, how could you conclude if it was deep or shallow?

8. How could you tell it was windy, without going outside?

9. About 70 percent of the earth is covered with water. The remaining 30 percent is land. People don't live on all that land. Why not?

10. If you were in the woods and saw what looked like lights through the trees, what might they be?

II. Think of something that you are afraid of doing—it could be anything at all (like failing a test, getting lost on the way, losing something precious). Now, explore this internal line of questioning and jot down your answers.

- What's the worst possible thing that could happen?
- What is the best thing that could happen?
- How does my preferred outcome look to me?
- Do I have any control over the outcome? To what degree?
- Can I ask anyone for help or advice?
- If the worst happens, will I still be all right?
- What is my plan for facing the worst?
- After I face the situation and move past it, what are my next steps? How will I apply what I've learned?

III. What thoughts does the image given below provoke? Write a paragraph in 100-120 words.



BBPS, PITAMPURA



BAL BHARATI PUBLIC SCHOOL, PITAMPURA, DELHI – 110034

MENTAL AGILITY
TOPIC – DIRECTIONS

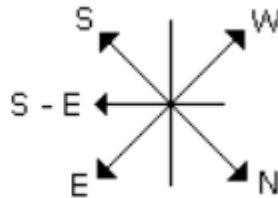
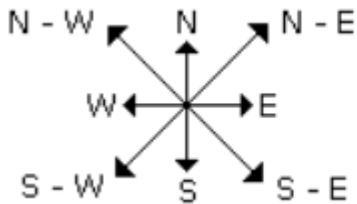
ANSWER KEY

LEVEL 1

SERIAL NO:3

Answer 1: C) South-East

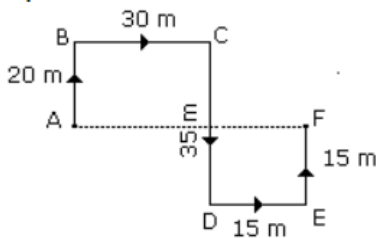
Explanation:



It is clear from the diagrams that new name of West will become South-East.

Answer 2: D) 45 m East

Explanation:

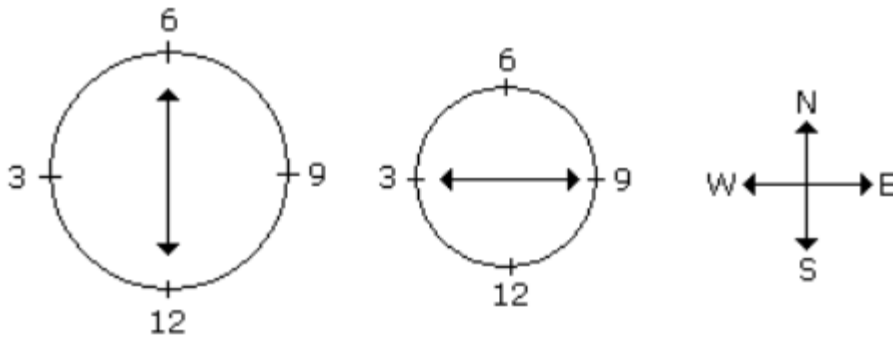


$$\begin{aligned} \text{Required distance} &= AF \\ &= 30 + 15 \\ &= 45 \text{ m.} \end{aligned}$$

From the diagram, F is in the East direction from A.
Hence the required answer is '45 m East'

Answer 3: D) West

Explanation:

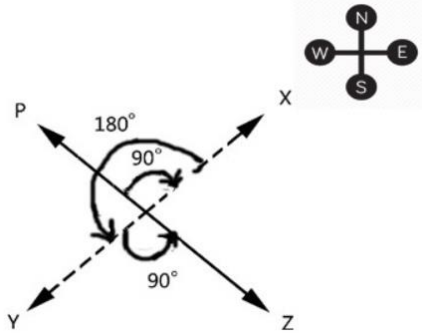


At 9.15 P.M., the minute hand will point towards west.

Answer 4: C) South-east

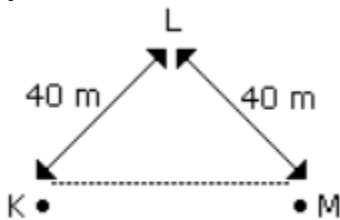
Explanation:

As shown in fig. the man initially faces in the direction OP. On moving 90° clockwise, he faces in the direction OX. On further moving 180° anticlockwise, he faces in the direction OY. Finally, on moving 90° anticlockwise, he faces in the direction OZ, which is South-east.



Answer 5: A) East

Explanation:



Hence M is in the East of K

Answer 6: C) South

Explanation:

Sun rises in the east in the morning. Since the shadow of Suresh falls to his right. So he is facing South.

Answer 7: B) North-West

Explanation:

From the given directions, now he is 1km in the North-West direction.

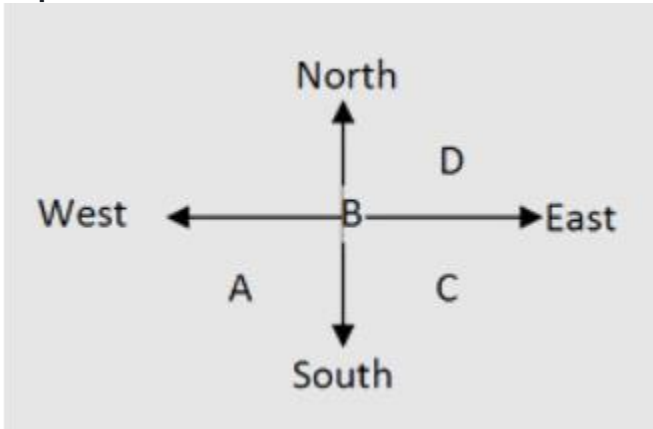
Answer 8: Option A

Explanation:

In the evening as sun is in the west, so the shadows fall towards east. Now, since Manju's shadow fell towards right, therefore, Manju is facing south. So, Sanju standing face to face with Manju was facing north.

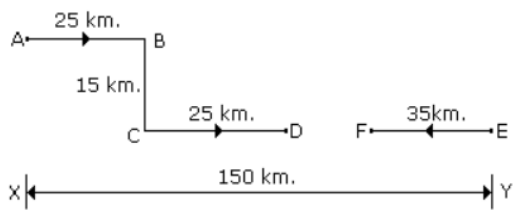
Answer 9: Option D

Explanation:



Answer 10: A) 65 km

Explanation:



$$\begin{aligned} \text{Required distance} &= DF \\ &= 150 - (25 + 25 + 35) \\ &= 150 - 85 \\ &= 65 \text{ km.} \end{aligned}$$