



BAL BHARATI PUBLIC SCHOOL, PITAMPURA, DELHI – 110034


CLASS IV & V

Solve to Evolve –No. 30



Name - \_\_\_\_\_ CLASS / SEC - \_\_\_\_\_ Date 12.12.2020

Q1. Dev is playing with his building blocks. He uses four of them to make a square like this:



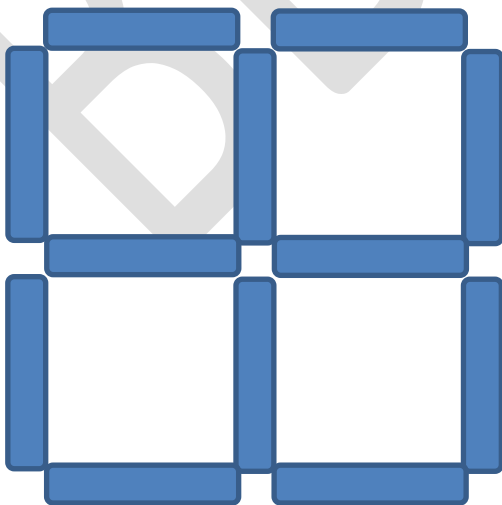
If he has 12 such blocks, what is the maximum number of squares he can make?

a. 4

b. 12

b. 3

d. 5



**Explanation:** The image above shows how 12 blocks can be put together to make four small squares. Don't forget to count the big square that is made by putting the 4 smaller ones together.

**Q2.** Sunny and his three friends want to watch a movie. There is a special offer at the theatre. They can either buy 2 tickets and get 2 free or get a discount of 45% + 6% on their tickets. Which option will turn out to be cheaper and why?



a. Buy 2 Get 2

b. 45% + 6%

**Explanation:** The buy 2 get 2 free option would provide a discount of 50% on each ticket, whereas the second option would give them a discount of 45% on the original price and then further 6% discount on the discounted price, which turns out to be a total discount of 48.3%.

**Q3.** Which noun begins with a T, ends with a T and has orange in the middle?

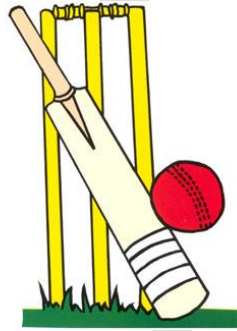
A3. TRAFFIC LIGHT



Q4. Each pair of images has something in common. Can you tell what is common?



\_\_BARK\_\_



\_\_BAT\_\_



\_\_CRANE\_\_