



BAL BHARATI PUBLIC SCHOOL, PITAMPURA, DELHI – 110034

CLASS III

Solve to Evolve -No 30 Answer Key



Name - _____ CLASS / SEC _____ Date 12.12.2020

Q1 . Which place value proves that 5,487 is less than 5,874?

- a) Ones place b) Tens place c) Hundreds place d) Thousands place

Answer: Part c (Hundreds place)

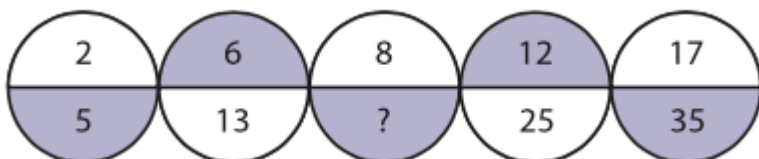
Q 2. Which property of addition will help you find the answer to the problem:

$$6 + 0 = ?$$

- a) Zero plus any number equals zero
b) Zero plus any number equals that number
c) Zero minus any number equals that number
d) Zero minus any number equals zero

Answer: Part a

Q3. What is the missing number in the given series ?



a) 17

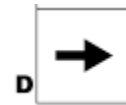
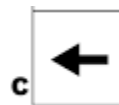
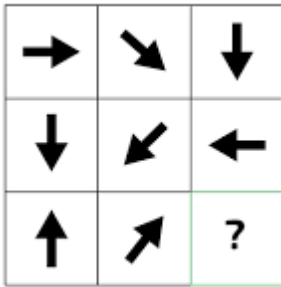
b) 27

c) 35

d) 41

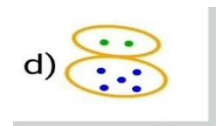
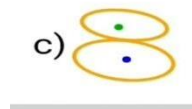
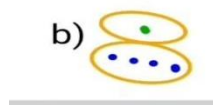
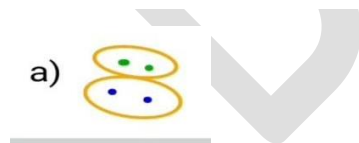
Answer: Part a ($8 \times 2 + 1 = 17$)

Q4. Chose the correct picture for the empty box:



Answer: Part D

Q5. Identify the relation and find the missing figure.



Answer: Part b