



BAL BHARATI PUBLIC SCHOOL, PITAMPURA, DELHI – 110034

CLASS III

Solve to Evolve –No. 30



Name - _____ CLASS / SEC _____ Date 12.12.2020

Q1 . Which of the following place value proves that 5,487 is less than 5,874?

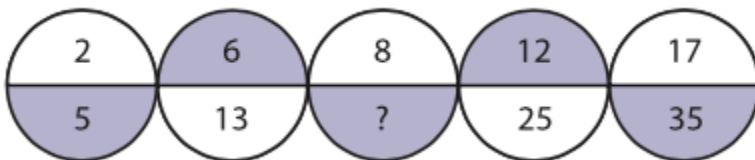
- a) Ones place b) Tens place c) Hundreds place d) Thousands place

Q 2. Which property of addition will help you find the answer to the problem:

$$6 + 0 = ?$$

- a) Zero plus any number equals to zero
b) Zero plus any number equals to that number
c) Zero minus any number equals to that number
d) Zero minus any number equals to zero

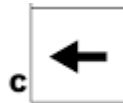
Q3. Choose the missing number in the given series ?



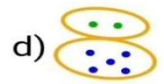
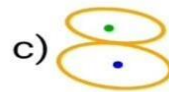
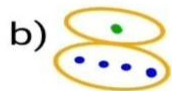
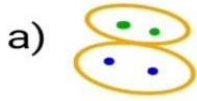
- a) 17 b) 27 c) 35 d) 41

Q4. Chose the correct picture for the empty box:

→	↘	↓
↓	↙	←
↑	↗	?



Q5. Identify the relation and find the missing figure.



BBPS, PF