



BAL BHARATI PUBLIC SCHOOL, PITAMPURA, DELHI – 110034
CLASS IV & V

Solve to Evolve –No. 29 ANSWER KEY



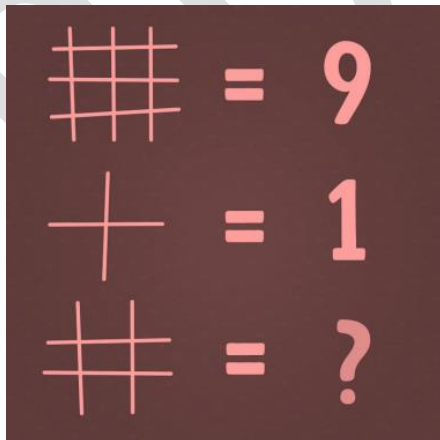
Name - _____ CLASS / SEC _____ Date – 28.11.2020

Q1. The day before yesterday, Chris was 7 years old. Next year, he'll turn 10. How can this be possible?



Answer: His birthday is on 31st December

Q2. What is the missing number?



A) 4

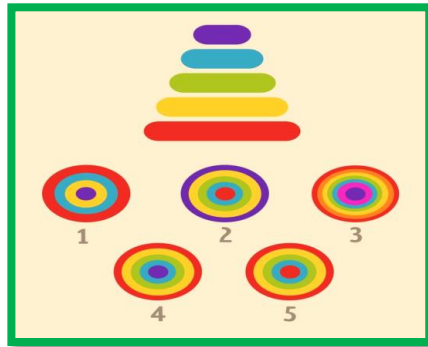
B) 5

C) 6

D) 7

E) 8

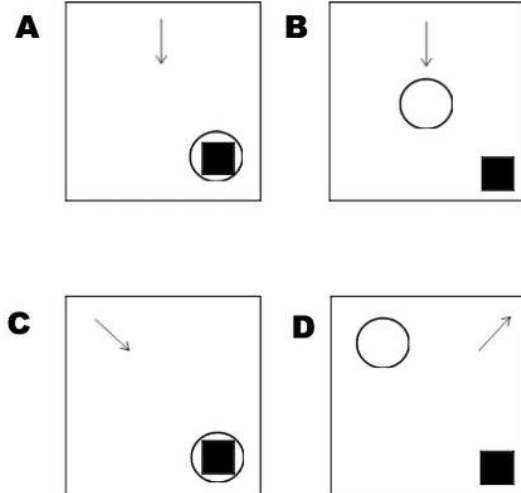

Q3. Imagine that you're looking at this pyramid from above.



Which of these views from above is correct?

- A) 1 B) 2 C) 3 **D) 4** E) 5

Q4. Choose the image that completes the pattern.



Answer: C

BBPS, PP