



Weekend Activities
Class -VIII

Subject – MEAL PLANNING

CHRISTMAS SPECIAL RECIPES

Red Velvet Cake- Eggless Recipe



Ingredients

- 1 + ½ cup all-purpose flour/ maida, sifted
- 2 tablespoons cocoa powder
- 1 teaspoon baking soda
- 1 cup castor sugar
- ½ cup vegetable oil
- ¼ cup yogurt
- 2 teaspoons lemon juice
- 2 teaspoons vanilla extract
- 4-5 teaspoons red food colour
- 1 cup milk + 1 tbsp vinegar
- 2 teaspoons salt for baking

Instructions

1. In a bowl, mix together milk and vinegar and allow to rest for 5 minutes.
2. Sieve maida, baking soda, and cocoa powder very well.

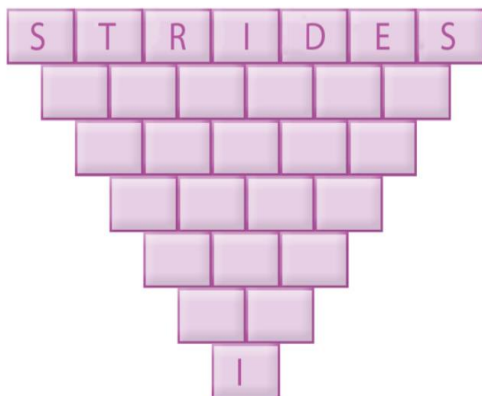
3. In another bowl, take sugar and oil and blend together. Add lemon juice and curd.
4. Add in red food colour.
5. Incorporate dry ingredients and buttermilk alternatively.
6. Mix until combined and do not over beat at this stage.
7. Prepare your tin with parchment paper or with a coating of maida.
8. You can bake in preheated oven at 180 degrees for 30-35 minutes.

BBPS, PITAMPURA

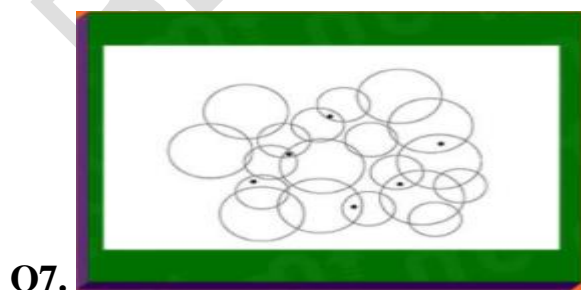
PUT ON YOUR THINKING CAP
LEVEL I

- Q1.** Which five-letter word becomes shorter when you add two letters to it?
- Q2.** How many times does the digit 5 occur in the numbers from 1 to 100?
- Q3.** Your parents have six sons including you and each son has one sister. How many people are there in the family?
- Q4.** I am the beginning of sorrow and the end of sickness. You cannot express happiness without me yet I am in the midst of crosses. I am always in risk yet never in danger. You may find me in the sun, but I am never out of darkness.
- Q5.** Fourteen of the kids in the class are girls. Eight of the kids wear blue shirts. Two of the kids are neither girls or wear a blue shirt. If five of the kids are girls who wear blue shirts, how many kids are in the class?

Q6



Beginning at the top of the upside-down pyramid, remove one letter from the word “strides” and rearrange the remaining letters to build a new six-letter word beneath. Continue the same process to each word until you get to the bottom.



Can you count the number of circles that contain a black dot?

Q8.

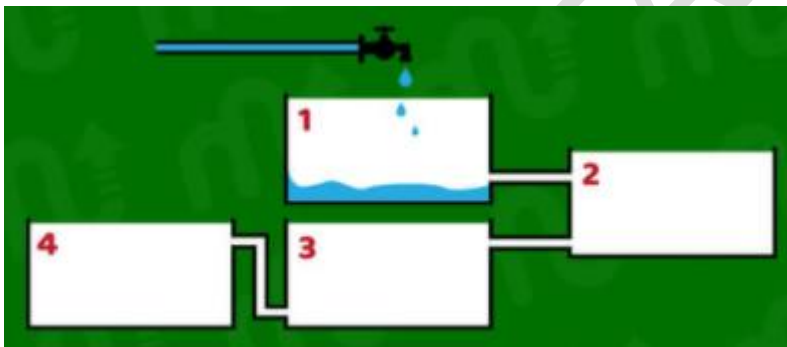
Use the numbers 2, 3, 4 and 5 and the symbols + and = to make a true equation.

Q9

1 = 4
2 = 16
3 = 64
4 = ?

What number should replace the question mark?

Q10 Which tank will fill up first?



BHUJO TOH जानें

CLASS VIII

(Answer key to the Critical Thinking Worksheet shared on 6 November'20)

1. D
2. D
3. C
4. B
5. C

6. Fun Puzzle:

- | | |
|------|------------------|
| i | X Men |
| ii | Iron Man |
| iii | Super Man |
| iv | Hulk |
| v | Flash |
| vi | Peter Parker |
| vii | Beast Boy |
| viii | Batman |
| ix | Thor |
| x | Power Puff Girls |

7. Option 3

8. Option 1