




CLASS III

Solve to Evolve -No 28



Name - _____ CLASS / SEC _____ Date 21.11.2020

Q1. In the given grid, which among these describes the position of



a) top left

b) bottom centre

c) bottom right

d) bottom left

Q2. What are the missing numbers?

1, 2, 4, (), 16, (), 64

a) 8 and 48





b) 12 and 32

c) 8 and 32


d) 9 and 36

Q3. Which will be the fifteenth object in the pattern?



a) 	c) 
b) 	d) 

Q4. The numbers in the boxes are linked in some way. Identify the relation and complete the last box.



- a) A b) C c) X d) Z

Q5. If 'desk' is called 'chair', 'chair' is called 'blackboard', 'blackboard' is called 'duster' and 'duster' is called 'chalk', then where does the teacher write in the classroom?

- a) desk b) chair c) duster d) blackboard