



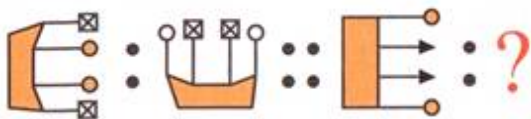
CLASS III

SOLVE TO EVOLVE -No 27

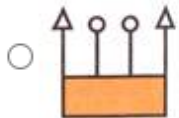


Name - \_\_\_\_\_ CLASS / SEC \_\_\_\_\_ Date 7.11.2020

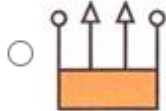
Q1. Which figure will replace the question mark?



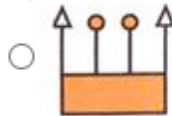
A)



B)



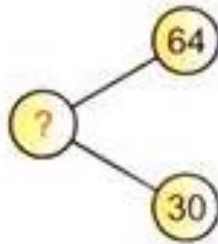
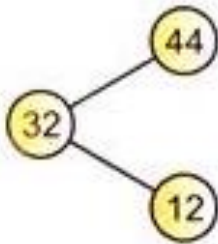
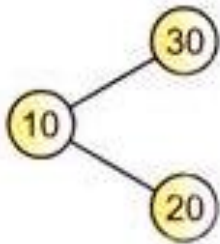
C)



D)



Q2. Find the missing number:



A) 30

B) 34

C) 90

D) 94

Q3. I am a 2- D shape. I have no corner.

A) circle

B) square

C) triangle

D) rectangle

**Q4.** A number pattern is shown below.

**1 2 2 3 1 2 2 3**

Which group of words represents the pattern shown above?

- A. blue, green, blue, red, blue, green, blue, red
- B. green, blue, blue, green, green, blue, blue, green
- C. blue, green, green, red, blue, green, green, red
- D. green, blue, green, red, green, blue, green, red

**Q5.** Use the table below to answer the question.

**Sally is selling candy bars for her school.**

Day	Bars Sold
Monday	3
Tuesday	6
Wednesday	9
Thursday	?

If the pattern continues, how many bars will Sally sell on Thursday?

- A. 4
- B. 5
- C. 10
- D. 12