



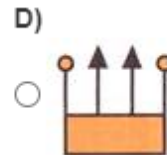
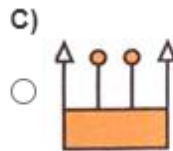
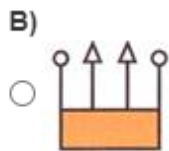
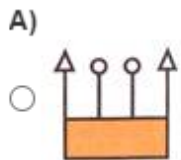
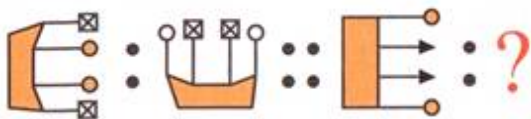
CLASS III

SOLVE TO EVOLVE -No 27 (ANSWER KEY)



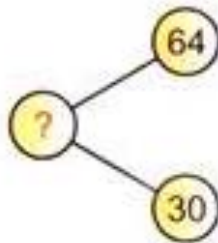
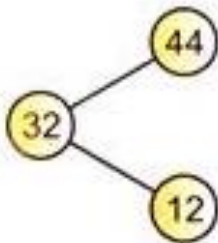
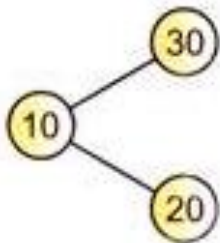
Name - \_\_\_\_\_ CLASS / SEC \_\_\_\_\_ Date 7.11.2020

Q1. Which figure will replace the question mark?



Answer : Part C

Q2. Find the missing number:



A) 30

B) 34

C) 90

D) 94

Answer : Part B

Q3. I am a 2- D shape. I have no corner.

A) circle

B) square

C) triangle

D) rectangle

**Answer : Part A**

Q4. A number pattern is shown below.

**1 2 2 3 1 2 2 3**

Which group of words represents the pattern shown above?

A. blue, green, blue, red, blue, green, blue, red

B. green, blue, blue, green, green, blue, blue, green

**C. blue, green, green, red, blue, green, green, red**

D. green, blue, green, red, green, blue, green, red

Q5. Use the table below to answer the question.

**Sally is selling candy bars for her school.**

Day	Bars Sold
Monday	3
Tuesday	6
Wednesday	9
Thursday	?

If the pattern continues, how many bars will Sally sell on Thursday?

A. 4

B. 5

C. 10

**D. 12**

BBPS, PP