



**Bal Bharati**  
PUBLIC SCHOOL

**BAL BHARATI PUBLIC SCHOOL, PITAMPURA**

**MATHS**

**DATE: 30-09-20**

**Greetings**

Dear Students,

Hope that your online learning process fills you with energy and enthusiasm.

Here is your daily PDF lesson for today.

**Subject Covered:** MATHS

**Topic:** - Addition

- Tables

**Subtopics:** # Revision of Addition

# Revision of Tables of 2,3,4 & 5

**Learning Outcomes:**

- ❖ Each child will be able to do addition sums and addition number stories without regrouping
- ❖ Each child will be able to do the dodging tables of 2,3, 4 & 5 (oral & written)

**Instructional Aids:** E- Learning Lesson, PDF. Base Ten Blocks. Number Cards, Environment objects and Online classes.



**Lesson development:**

**Task 1** - Dodging tables of 2,3, 4 & 5

Where to do ? Maths notebook

**Kindly note : This will be done in the online classroom.**

**Task 2** - Revision of Addition (Worksheets Attached)

Worksheet no. 1 ( To be done in online class)

Worksheet no. 2 ( Practice worksheet)

Where to do ? Print and keep in a folder or Write on a White A4 sized sheet and paste it in the notebook .

**Task - 3** Revision of Addition

( 2 digit & 3 digit numbers and Number stories)

Where to do ? Maths notebook

**Kindly note : This will be done in the online classroom.**

**Task - 4** Maths book Page no. 88 ( Let's Try at Home )

Where to do ? Maths book

😊 NOTE:

1 Keep revisiting the previous modules and concepts along with the new ones.

2. Make sure the child practices a module/concept/topic for a given subject thoroughly, before going on to the next one.

# Bal Bharati Public School, Pitampura




Name: \_\_\_\_\_




Class: II \_\_\_\_\_




Date: \_\_\_\_\_

## ADDITION WORKSHEET NO. 1

Q1. Draw dots in the empty boxes to complete the following.

a.  +  = 

b.  +  = 

c.  +  = 

Q2 Fill in the blanks.

a.

1 + ____	4 + ____	5 + ____
2 + ____	9	____ + 6
3 + ____		7 + ____
0 + ____	____ + 9	8 + ____

b.

1 + ____	4 + ____	5 + ____
2 + ____	10	____ + 6
3 + ____		7 + ____
0 + ____	____ + 9	8 + ____



**ACTIVITY 3:** Look at each sum. If the sum adds up to **EXACTLY 30**, shade the box. What shape do you have?

$17+7$	$13+15$	$11+13$	$15+15$	$5+21$	$6+23$	$15+14$
$19+3$	$10+10$	$10+5+15$	$12+12$	$17+13$	$19+7$	$21+8$
$16+11$	$5+5+20$	$9+9+2$	$3+17+4$	$7+7+7$	$20+10$	$6+6+6$
$8+8+14$	$2+18+6$	$19+1+5$	$8+8+8$	$12+6$	$20+5$	$9+21$
$25+2$	$12+12+6$	$17+3+7$	$6+14$	$6+6+6$	$19+11$	$19+6$
$18+4$	$13+12$	$2+28$	$3+3+4$	$22+8$	$10+14$	$9+9+2$
$7+14$	$19+10$	$8+16$	$14+16$	$13+4$	$22+7$	$9+12$

# Bal Bharati Public School, Pitampura

Name: \_\_\_\_\_ Class: II \_\_\_\_\_ Date: \_\_\_\_\_

## ADDITION WORKSHEET NO.2

### Alphabet Fun!

Look at the alphabet chart given below. |

a	b	c	d	e	f	g	h	i	j	k	l	m
1	2	3	4	5	6	7	8	9	10	11	12	13
n	o	p	q	r	s	t	u	v	w	x	y	z
14	15	16	17	18	19	20	21	22	23	24	25	26

Q1. Write the value of each word. Circle the words that add up to 20, 30, 40 or 50 .

For example: TOE = 40 ( 20 + 15 + 5)

TOE = 40	HIM =	MAP =	DIG =	KIT =
WEB =	GO =	BED =	WAX =	LION =
MAN =	EAT =	SAT =	JAM =	DRAG =

Q2. What is the value of your name?

Q3. What is the highest value word?

Q4. Which all words have value that add up to 20, 30, 40 and 50.

Words for value 20: \_\_\_\_\_

Words for value 30: \_\_\_\_\_

Words for value 40: \_\_\_\_\_

Words for value 50: \_\_\_\_\_

### Magic Squares!

Look across, down, and diagonally.  
Circle pairs of numbers that give the sum at the top.

1.

16			
9	8	12	13
7	1	4	11
2	7	3	10
5	10	8	12
1	11	4	7

2.

9			
0	5	3	6
8	4	2	1
2	1	5	2
1	7	6	3
8	1	0	4

### Scratch your mind!

Q1. Sum of two numbers is 8. If one number is 6, what is the other number?

Q2. Tick the correct option.

- a.  $6 + 5 = 5 + 6$
- b.  $10 + 0 = 10 + 10$
- c.  $3 + 8 = 11 + 3$
- d.  $9 + 5 = 5 + 8$

Q3. Find the number which is 26 more than 10.

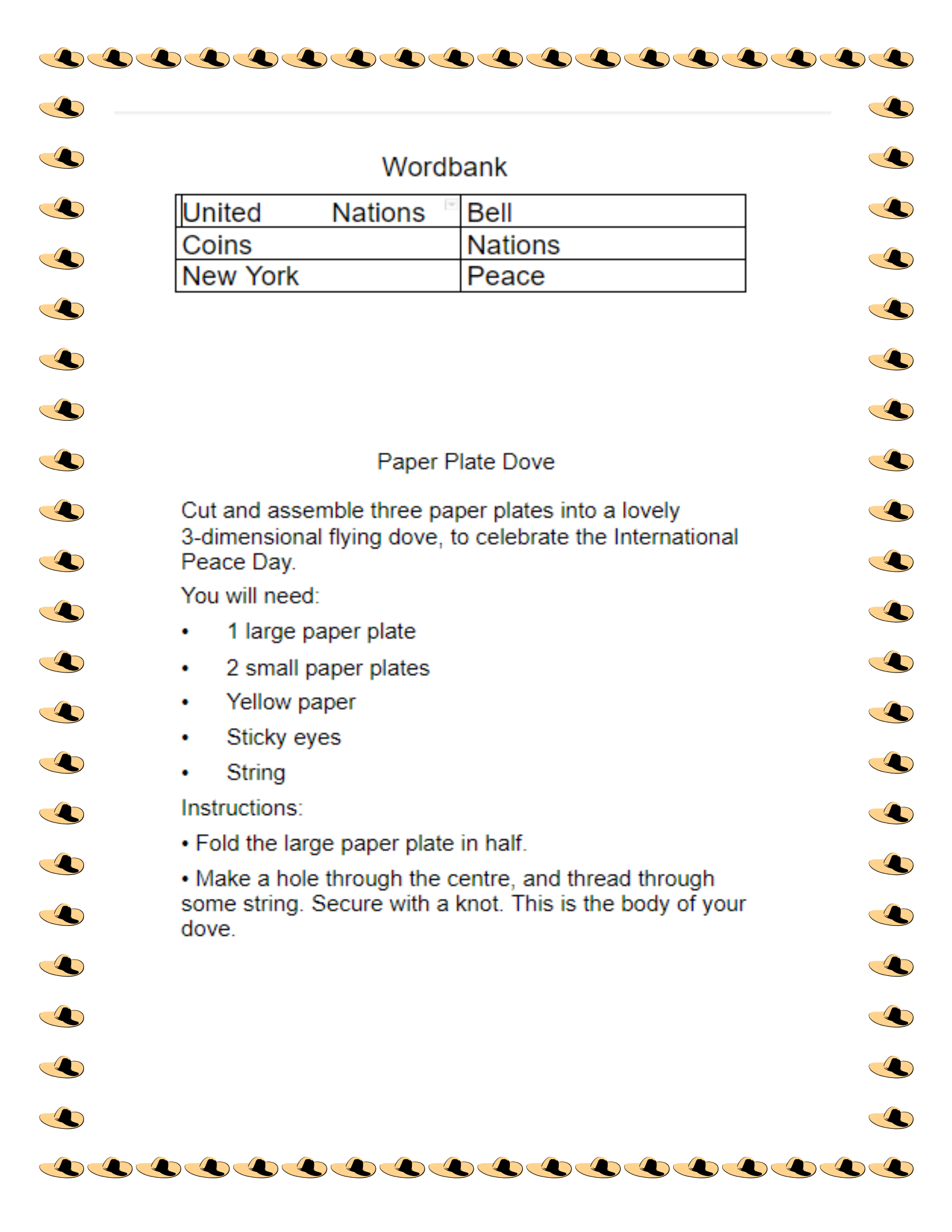


## International Day of Peace

Fill in the missing words using the words given in the box below

- 1) International Day of ....., or peace day is held on 21st ..... every year.
- 2) The first Peace Day was held in 1981. In 2001 the countries of the .....  
..... adopted the day and fixed the date
- 3) At the start of the day the United Nations Peace ..... is rung at the United Nations Head Quarters in .....
- 4) A gift from Japan , the bell was cast from ..... donated by children and it carries the inscription " Long live absolute world peace"





---

## Wordbank

United Nations	Bell
Coins	Nations
New York	Peace

## Paper Plate Dove

Cut and assemble three paper plates into a lovely 3-dimensional flying dove, to celebrate the International Peace Day.

You will need:

- 1 large paper plate
- 2 small paper plates
- Yellow paper
- Sticky eyes
- String

Instructions:

- Fold the large paper plate in half.
- Make a hole through the centre, and thread through some string. Secure with a knot. This is the body of your dove.

- Cut one of the small paper plates in half. Glue one half to each side of the body to form the wings, varying the angle a little to give the bird dimension.
- To make a tail, cut a segment from the second paper plate and glue inside the folded body.
- Glue on a beak cut from yellow paper and the sticky eyes.

