



BAL BHARATI PUBLIC SCHOOL, PITAMPURA, DELHI – 110034

Weekend Activities

Subject: Art

(Classes IX and X)

Topic : Poster Designing (Current Situation)

Task: Design a poster depicting the positive aspects of the present situation.

Material Required


- Art file or A 3 Cartridge Sheet
- Pencil
- Scale
- Eraser
- Colour Pencils, Oil Pastel, Sketch Pen

Positive Aspects of Lockdown (some ideas).

- Nature at its best
- Go Digital
- E – learning
- Respecting Indian Values and Customs
- Family Time
- Be more grateful for the gifts of life

Give a brief write up explaining your poster.

You may take reference from the internet.



(For Reference)

PUT ON YOUR THINKING CAP
Subject: Mental Ability
LEVEL II

Q1. Rishi is x years old. Pooja is 3 years older than Rishi and 5 years older than Ashish. Find their total age.

- (A) $3(x + 1)$ years (C) $(3x + 1)$ years
 (B) $(x + 10)$ years (D) $2(x + 8)$ years

Q2. Priya sold two different bags for 120 each. She made a profit of 25% on the first bag but incurred a loss of 25% on the second bag. How much Was her overall profit or loss for the sale of the bags?

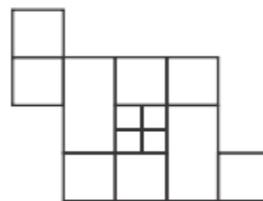
- A) Profit of 18 (B) Loss of 40 (C) Profit of 24 (D) NONE

Q3. In the following arrangement how many such digits are there, each of which is immediately preceded by a letter and immediately followed by a symbol?

A 7 * L P 2 N S 3 @ H K 2 P D 8


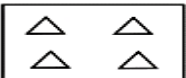

- A) 4 (B) 3 (C) 2 (D) 1

Q4. How many squares are there in the given figure?

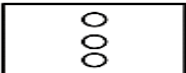
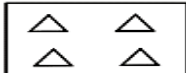
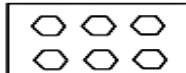





- (A) 11 (B) 13 (C) 14 (D) 15

Q5.


is to

as

is to....?

A **B** **C** **D** **E** **F**

- (A) A (B) B (C) C (D) D

Q6. If South-East becomes North, North-East becomes West and so on. What will West become?

- A) North-East B) North-West
C) South-East D) South-West

Q7. Two bus tickets from city A to B and three tickets from city A to C cost Rs. 77 but three tickets from city A to B and two tickets from city A to C cost Rs. 73. What are the fares for cities B and C from A?

- A) Rs. 4, Rs. 23 B) Rs. 13, Rs. 17
C) Rs. 15, Rs. 14 D) Rs. 17, Rs. 13

Q8. How many 4's are there preceded by 7 but not followed by 3?

5 9 3 2 1 7 4 2 6 9 7 4 6 1 3 2 8 7 4 1 3 8 3 2 5 6 7 4 3 9 5 8 2 0
1 8 7 4 6 3

- A) Four B) Three
C) Six D) Five

Q9. If $A + B = 2C$ and $C + D = 2A$, then

- A) $A + C = B + D$ B) $A + C = 2D$
C) $A + D = B + C$ D) $A + C = 2B$

Q10. A is B's sister. C is B's mother. D is C's father. E is D's mother. Then, how is A related to D?

- A) Grandfather B) Grandmother C) Daughter D) Granddaughter

Subject: Meal Planning

Cucumber Mint Lemonade

Let us make a perfect summer beverage- lemonade infused with the refreshing combination of cucumber and mint.



Ingredients

- Lemon.....2
- Organic cucumber sliced.....8 to 9 slices
- Granulated white sugar.....4 tbsp(1 cup water to prepare the sweet syrup)
- Chilled water.....500ml
- Fresh mint leaves.....a sprig
- Sweet basil seeds.....2 tbsp(optional)(soak them in 1/3 cup of regular tap water for 10 minutes)
- Salt.....1tsp

Method

Step 1: In a pitcher or large bowl, add 4 tablespoons of sugar and 1 cup water and stir well until the sugar gets dissolved.

Step2: In a food processor add sliced cucumber (deseeded), mint leaves and process until the cucumbers are pureed and form a thick paste.

Step 3: Squeeze out juice of 2 lemons and mix the lemon juice, cucumber puree, sugar syrup and 500 ml of chilled water.

Step 4: Give it a nice mix. Add pinch of salt and stir in.

Step 5: Pour in serving glass and top it with soaked basil seeds / sabja seeds.

Serve a natural body coolant filled with the richness of vitamins and minerals to your loved ones.

Mango Falooda

Ingredients

- Rose or strawberry jelly.....(as per choice)
- Mango(diced).....1
- Mango(peeled in vermicelli).....1
- Sabza (soaked).....¼ cup
- Pistachios(blanchd and peeled).... 1/4 cup
- Almonds(blanchd and peeled)..... 1/4 cup
- Granulated sugar.....1tbsp
- Mango pulp.....1/2 cup
- Vanilla ice cream.....4 scoops
- Sweetened condensed milk..... 1/2 cup
- Salt and black pepper.....a pinch each

Method

Step 1: Pour jelly into a glass and refrigerate for 10-15 minutes to set instantly.

Step 2: Add diced mango, sabza, pistachios, almonds, sugar, mango pulp, ice

cream, 2 tablespoons condensed milk.

Step 3: Garnish with mango vermicelli, mint sprig, salt and black pepper powder.

Serve chilled.



BHUJO TOH जानें

CLASS IX-X

Answer key to the Critical Thinking Worksheet shared on 22 May 2020

PUZZLE 1

B. Explanation: We have to go against investment in offshore drilling and support importing oil on tankers. In that case, the argument is weakened because the lowered risk of oil spills resulting from improved oil tanker design could make tankers less problematic than offshore operations.

PUZZLE 2

Explanation: Options B, C and D advocate means by which costs can be reduced. This would have a direct effect on profits, increasing them.

PUZZLE 3



PUZZLE 4

1. nail biting finish
2. Toe the line
3. Eye opener
4. Nosedive

PUZZLE 5

A **notable** doctor was **not able** to operate on a person as there was **no table**.

BBPS, PITAMPURA