



BAL BHARATI PUBLIC SCHOOL, PITAMPURA, DELHI – 110034
WEEKEND ACTIVITIES

Class – IX & X

SUBJECT: ART

Topic – Historical Monuments of Delhi

Choose and draw any one Historical Monument of Delhi.



Material Required:


- Art file or A 4 Cartridge Sheet
- Pencil
- Eraser
- Ruler
- Any colour (medium) can be used.

STEP 1: Write the brief history of any three monuments. Cover the following points:

- Period it belongs to
- Who built it?
- About its Architecture
- Type of material used

You can take reference from the internet.





SUBJECT: MEAL PLANNING

TOPIC:- Roti Wraps

An innovative way to eat leftover rotis as a nutritious and delicious snack

Material required:-

- Rotis.....3-4
- Pizza Pasta sauce/Ketchup.....3Tbsp
- Hung Curd.....3Tbsp
- Chopped Salad vegetables1cup
- Vinegar/ Lemon juice.....1/2 tsp
- Cubed Paneer/ boiled potato.....1/2 cup
- Salt, pepper, oregano, chilli flakes...to taste
- Processed Cheese.....2 cubes

STEP 1:- Take a bowl and mix chopped salad vegetables with salt, pepper and some vinegar or lemon juice.

STEP 2:- Take another bowl and mix cubed paneer and/ or boiled potato with a dressing of hung curd, salt, pepper and herbs of your choice.

STEP 3:- Take a roti and smear a tablespoon of available sauce or ketchup on it.

STEP 4:- Lay a portion of salad vegetables on one half of the roti base prepared. Put a layer of paneer- potato filling over this and top it with some grated cheese. Wrap the other half over it.

STEP5:- Toast this roti wrap in an equity toaster.

Serve hot with dip of your choice and may be some wafers to add that crunch.

Happy Cooking!

TOPIC:- Baked Yogurt

A delectable baked delight for all age groups

Material required:-

- Thick curd.....1 cup
- Fresh cream/malai.....1 cup
- Condensed milk.....3/4 cup
- Vanilla essence.....1 tsp
- Orange zest.....2 tsp
- Or Orange flakes.....1/3 cup

STEP 1:- Take a bowl and mix all the ingredients in it.

STEP 2:- Take some shallow earthen katoris if available else pour the prepared mixture in paper cups/ baking bowls and place these in a tray with a little water. Bake in the centre of a preheated oven at 160 degrees centigrade for 12-15 min. Take it out when it is set.

STEP 3:- Cool completely for an hour in a refrigerator.

Serve garnished with some nuts of your choice. You may use any seasonal fruit to prepare baked yogurt. Happy cooking!

SUBJECT: MENTAL ABILITY

PUT ON YOUR THINKING CAP

SERIAL NO: 1

Directions for Q (1-3)

From the pairs of words (a-e) you are to select the pair which is related in the same way as the words of the first pair.

Q1. Food is to Hunger as Sleep is to.....?

- a. Rest b. dream c. night d. bed e. weariness

Q2. Kite: Bird as.....:Fish

- a. Thread b. boy c. submarine d. crow e. snake

Q3. Scissors: Cloth::..... :

- a. Axe: Wood b. Stone: grinder c. Knife: stone d. Roller: flatten e. Gun: Hunt

In each of the following questions (4-6)

A number series is given with one term missing. Choose the correct alternative that will continue the same pattern and fill in the blank spaces.

Q4. 8,6, ?,2,0,-2

- a. 4 b. 6 c. 8 d. -4

Q5. 10,15, 25,?,60,85

- a. 30 b. 35 c. 40 d. 45

Q6. 4, 16, 36, 64, ?, 144

- a. 81 b.90 c.100 d 121

Q7. If in certain code, STUDENT is written as RSTEDMS, then how would TEACHER be written in the same code?

- a. SZZDGEQ b. SZDDGEQ c. SDZDGDQ d. SDZCGDQ

Q8. A is B's sister. C is B's mother. D is C's father. E is D's mother. Then, how is A related to D?

- a. Grandfather b. Grand mother c. Daughter d. Grand daughter

Q9. If $Z = 52$ and $ACT = 48$, then BAT will be equal to.....

- a. 39 b. 41 c. 44 d. 46

Q10. In a certain code language COMPUTER is written as RFUVQNPC. How will MEDICINE be written in that code language?

- a. MFEDJJOE b. EOJDEJFM c. MFEJDJOE d. EOJDJEFM

Q 11 Look at the series 2, 1, $\frac{1}{2}$, $\frac{1}{4}$,.....

What number should come next?

- A) $\frac{1}{3}$ b) $\frac{1}{8}$ c) $\frac{2}{8}$ d) $\frac{1}{16}$


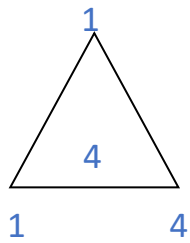
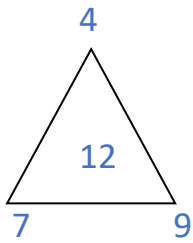
Q 12 F2, _____, D8, C16, B32. What number should come in blank?

- a) A16 b) G 4 c) E4 d) E3

Q 13 A person crosses a 60Km long street in 5 hrs. What is his speed in Km/hr?

- a) 16 Km/hr b) 12Km/hr c) 14 Km/hr d) 15 Km/hr

Q 14 What number replaces the question mark?



a) 5

b) 8

c) 9

d) 10

Q 15 Which letter replaces question mark?

A Z B Y C X D ___?___

a) L

b) W

c) N

d) P