



Name - \_\_\_\_\_

Class/ Sec - V \_\_\_\_\_

Date-14.04.2020

In the previous class, we studied 8-digit numbers and 9-digit numbers.

## ACTIVITY


(Not to be done in the notebook)

**TOPIC:** Playing with Numbers.

**OBJECTIVES:** To frame numbers using number cards.

**REQUIRED KNOWLEDGE:** Knowledge about relation between different places in Indian place value chart.

**MATERIAL REQUIRED:** Some Origami Strips, pencils, colour pens, Origami sheets.



A group of children are playing with the number cards having digits 0 to 9 and making numbers of their choice. Guess the numbers they made:

- a. The largest 6-digit number using the above number cards. {without repeating the digits}

--	--	--	--	--	--

- b. The largest 5 digit even number. {without repeating the digits}.

--	--	--	--	--

- c. The smallest 8 digit number. {without repeating the digits}.

--	--	--	--	--	--	--	--

d. The smallest 7 digit odd number.{ with / without repeating digits }

(Without repeating)

(with repetition)

e. The 8 digit number having 48 thousands.(You may have more than one correct answer)

**READING NUMERALS**


In this lesson, let's study about **how to read the numerals**

**STEPS TO BE FOLLOWED**

- Mark periods using commas.
- Start putting commas from R.H.S(right hand side)
- Put first comma after 3 places of ONES PERIOD (ones, tens, hundreds)
- Next comma is put after 2 places of THOUSANDS PERIOD (thousand, ten thousand)
- Next is after 2 places of LAKHS PERIOD (lakh, ten lakh)

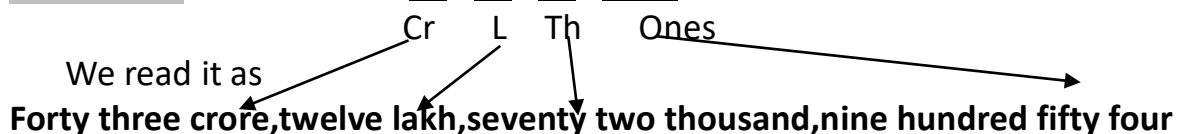
**EXAMPLE 1**

**4 15 29 682**



**EXAMPLE 2**

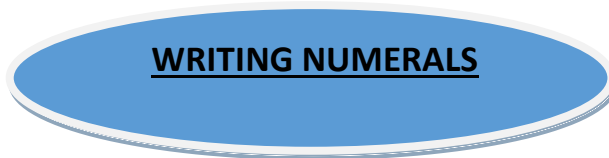
43 , 12 , 72 , 954



**LET'S PRACTISE (to be done in the notebook)**

Q1. Mark the periods using commas and write the number names:

- A) 26579694
- B) 63935651
- C) 858201572
- D) 452912016



Now let's see **how to write numerals**

**EXAMPLE 1**

Six Crore	twenty three lakh	fourteen thousand	two hundred nine
-----------	-------------------	-------------------	------------------

↓            ↓            ↓            ↓

6 , 23 , 14 , 209  
Cr      L      Th      Ones

**EXAMPLE 2**

Thirty two crore	sixty six lakh	seven hundred fourteen
------------------	----------------	------------------------

↓            ↓            ↓            ↓

32 , 66 , 00 , 714  
Cr      L      Th      Ones

**Remember : We write zeros for the missing places**

**LET'S PRACTISE (to be done in the notebook)**

Q2. Write numerals for the following :

- A) Fourteen crore ,twelve lakh,ninety two thousand,three hundred eighty two.
- B) Fifty crore,ninety lakh,five hundred sixteen.
- C) Eight crore,twenty thousand,ninety two.
- D) Five crore,ten lakh,seven thousand,twenty.

Do the following in the notebook from Maths Book Vol. 1 ( let's Practice Page 8 )

(Questions are marked in RED in the scanned image of the book)

Q 1 ( e, f, g, h )

Q 2 ( e, f, g, h )

### Let's Practise

1. Mark commas at appropriate places and write the number in words;

a 76529694

b 43925051

c 958201572

d 90170015

e 130082009

f 75100308

g 250910016

h 52008905

2. Use stickers for the numerals of the following:

a Fourteen crore twelve lakh ninety two thousand three hundred eighty two

b Fifty crore nine lakh five thousand three hundred

c Eight crore twenty thousand ninety two

d Five crore ten lakh seven thousand twenty

e Three crore seven hundred

f Eighty three crore sixty thousand

g Fourteen lakh sixty three thousand

h Three crore twenty seven lakh four thousand five hundred

3. Cor

S. No.	
1	4
2	8
3	3
4	4
5	4



4. Wr

a

b

c

5. Wr

a

b

c

d

e

f

6. Co

a

b

c

d

e

f

g



**GK ACTIVITY**



**STAR GAZING**

A clear night sky offers an ever-changing display of fascinating objects to see — stars, constellations, and bright planets, often the moon, and sometimes special events like meteor showers.

One of the major effects of coronavirus lockdown around the world has been the tremendous reduction in pollution level. One can breathe in fresh air. And after ages probably, stars are also visible in the night sky.

This is an ideal time to stargaze, given the number of constellations one can easily spot in the night sky without a telescope or even binoculars.

Hope you did not miss the **GIANT PINK SUPERMOON** that recently graced the night sky.

You might not want to miss another **major celestial event** that is going to occur soon: **Jupiter, Saturn, Mars and the Moon** will appear together for three days! April 14, 15, 16.



**DO WATCH:** <https://www.youtube.com/watch?v=1sZ15SUeS9w>

1) Name any 2 constellations which you can see in the night sky .

\_\_\_\_\_

2) Name the brightest star in the sky.

\_\_\_\_\_

3) On what date, did we witness the “GIANT SUPERMOON” this month?

\_\_\_\_\_